








































Instructions












Each shape stands for one of these numbers:

0 1 2 3 4 5 6 8 9 10 12

With a partner, work out which number each shape represents and explain how you know.

 x  x  = 	 x  = 
 x  = 	 x  = 
 x  = 	 x  = 
 x  = 	 x  = 
 x  = 	 x  = 
 x  = 	 x  = 

- Try starting with  and 
- Cross off numbers as you work them out

 = because...	 = because...
 = because...	 = because...
 = because...	 = because...
 = because...	 = because...
 = because...	 = because...
 = because...	